

# Volume

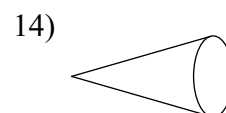
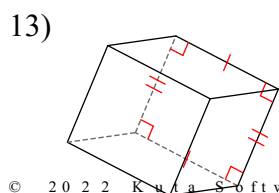
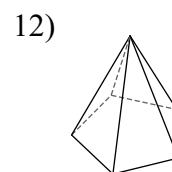
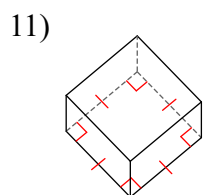
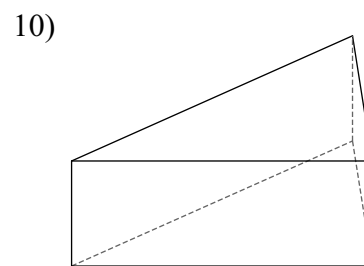
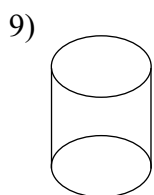
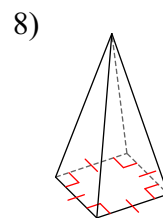
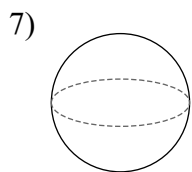
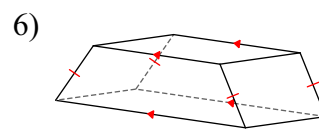
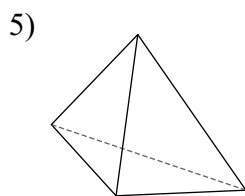
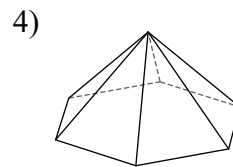
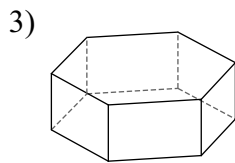
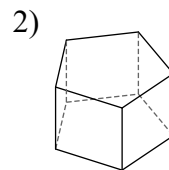
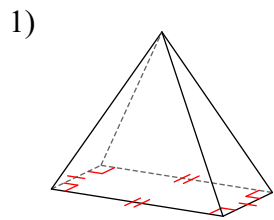
Match each figure with one of the following terms:

triangular prism  
pentagonal prism  
triangular pyramid

square prism  
hexagonal prism  
circular pyramid  
pentagonal pyramid

rectangular prism  
circular prism  
square pyramid  
hexagonal pyramid

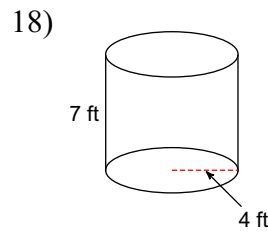
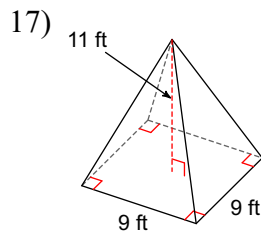
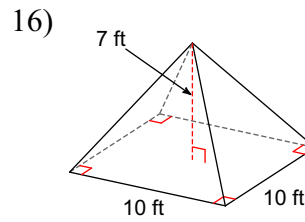
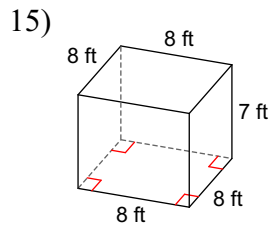
trapezoidal prism  
sphere  
rectangular pyramid



**Find the volume of all four shapes.**

**Draw a smiley face inside the shape that holds the most water.**

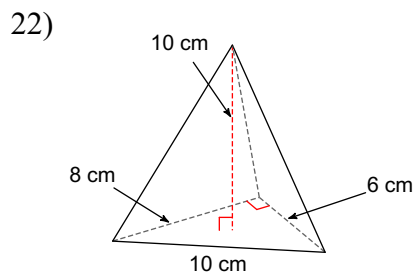
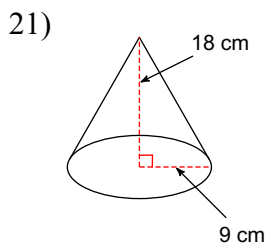
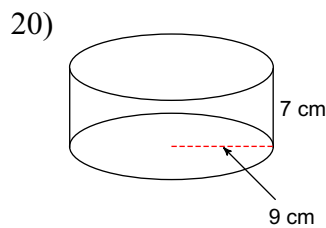
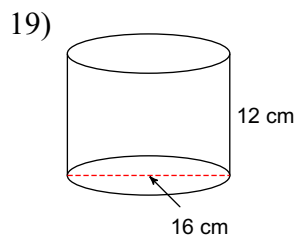
**Draw a frowny face inside the shape that holds the least water.**



**Find the volume of all four shapes.**

**Draw a smiley face inside the shape that holds the most water.**

**Draw a frowny face inside the shape that holds the least water.**



**Find the volume of all four shapes.**

**Draw a smiley face inside the shape that holds the most water.**

**Draw a frowny face inside the shape that holds the least water.**

